

Name: \_\_\_\_\_

Date: \_\_\_\_\_

**Answers****Multi-Digit Multiplication & Division**

#2

Multiply using the strategy of your choice. Show your work in the space provided or use additional paper.





1.  $36 \times 14$

**504**

2.  $97 \times 62$

**6,014**

3.  $451 \times 23$

**10,373**

Divide using the strategy of your choice. Show your work in the space provided or use additional paper.

4.  $806 \div 9$

**89 r5**

5.  $2,459 \div 7$

**351 r2**

6.  $3,217 \div 12$

**268 r1**