
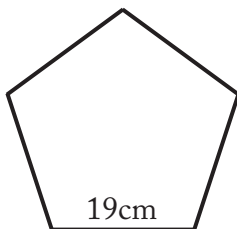


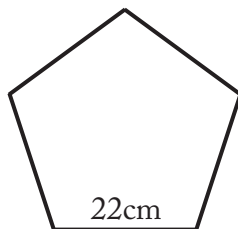
**Answer Key****More Pentagon Perimeter Practice****Directions:** Find the perimeter of each pentagon.**Remember  $P=5a$  where  $a$  = side.**

1.



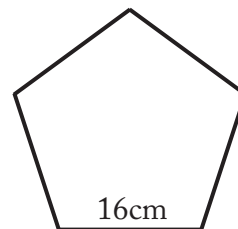
**$P= 95cm$**

2.



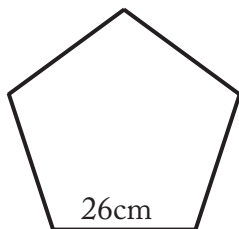
**$P= 110cm$**

3.



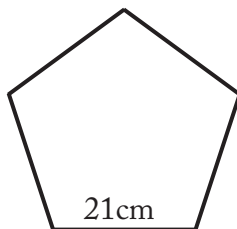
**$P= 80cm$**

4.



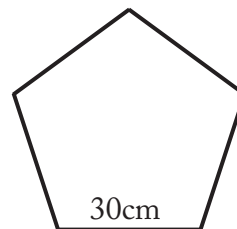
**$P= 130cm$**

5.



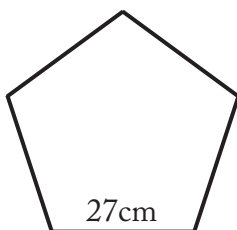
**$P= 105cm$**

6.



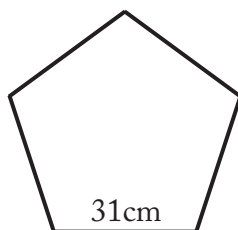
**$P= 150cm$**

7.



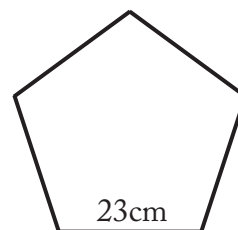
**$P= 135cm$**

8.



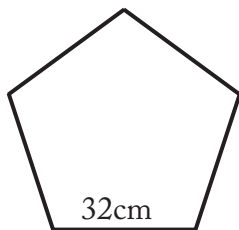
**$P= 155cm$**

9.



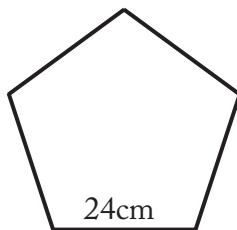
**$P= 115cm$**

10.



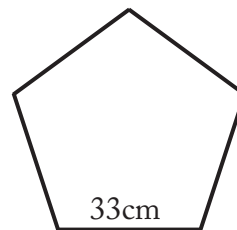
**$P= 160cm$**

11.



**$P= 120cm$**

12.



**$P= 165cm$**