

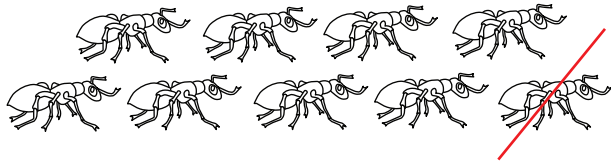
Name: _____

Date: _____


Answer Key

Mid-Year Kindergarten Math Assessment: Subtraction within 10

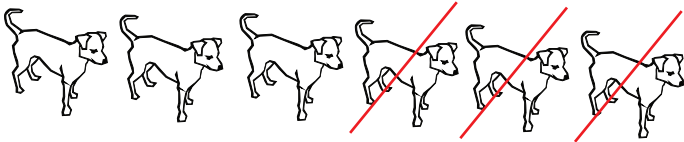
Directions: Use the pictures to help you solve each problem. Cross out the amount to take away, then count how many are left.




$$9 - 1 = \underline{8}$$




$$5 - 2 = \underline{3}$$




$$6 - 3 = \underline{3}$$




$$2 - 0 = \underline{2}$$



$$7 - 4 = \underline{3}$$



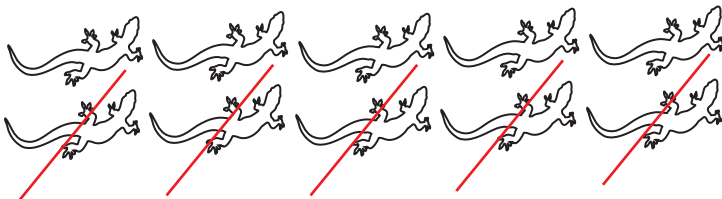
$$4 - 4 = \underline{0}$$



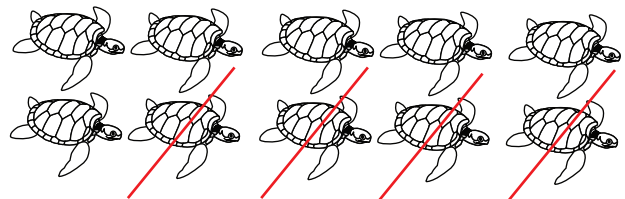
$$8 - 2 = \underline{6}$$



$$7 - 1 = \underline{6}$$



$$10 - 5 = \underline{5}$$



$$10 - 4 = \underline{6}$$