

Name: \_\_\_\_\_

Date: \_\_\_\_\_

**Answer Key**

## Mid-Year Kindergarten Math Assessment: Addition within 10

Directions: Solve the addition problems.



$$5 + 1 = \underline{6}$$



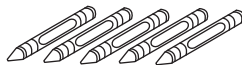
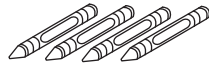
$$7 + 3 = \underline{10}$$



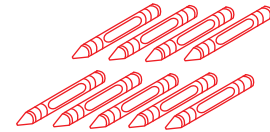
$$3 + 4 = \underline{7}$$



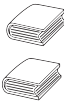

$$2 + 2 = \underline{4}$$



$$4 + 5 = \underline{9}$$



$$6 + 1 = \underline{7}$$



$$8 + 2 = \underline{10}$$



$$9 + 1 = \underline{10}$$

