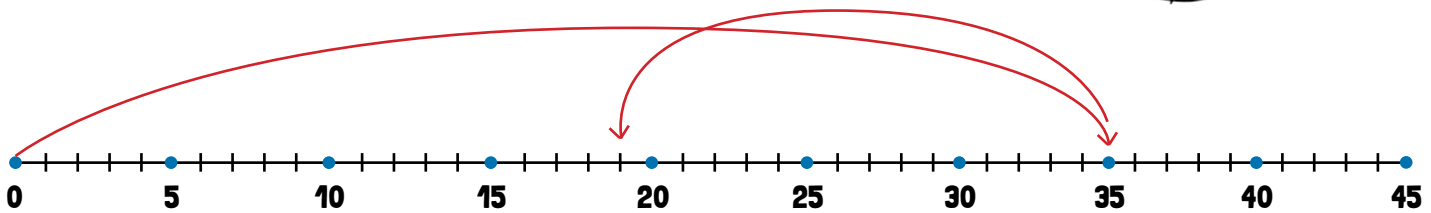



Now, you try. Read the problems and use the number lines to help you solve them.

1

Krista cut a length of 35 cm of yarn to complete an art project. She realized she had too much and cut off 16 cm. How much yarn does Krista have left?



Number sentence

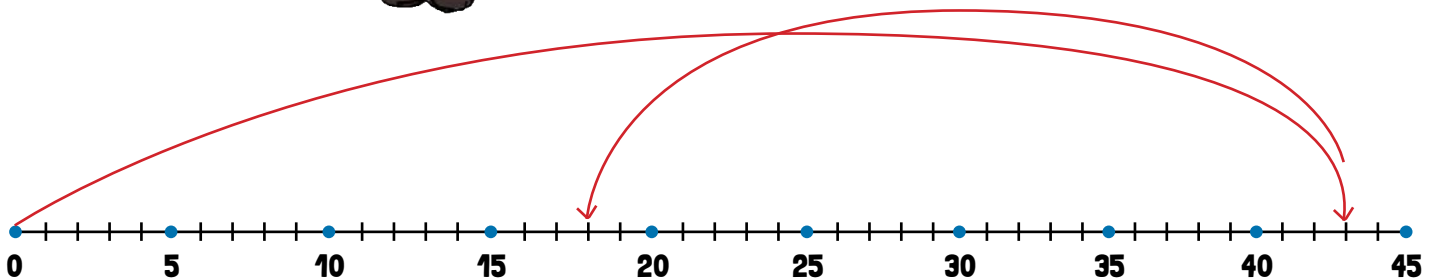
$$35 \text{ cm} - 16 \text{ cm} = 19 \text{ cm}$$

Krista's piece of yarn is **19** cm long.



2

Baron left Misha's house and walked 43 meters to Todd's house. When he left Todd's house he walked 25 meters back toward Misha's to get to his own house. How far is Baron's house from Misha's house?



Number sentence

$$43 \text{ meters} - 25 \text{ meters} = 18 \text{ meters cm}$$

Baron's house is **18** meters from Misha's house.

