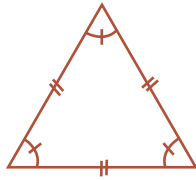
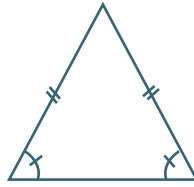


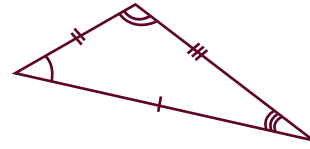
Meet the Triangles



Equilateral triangle



Isosceles triangle




Scalene triangle

Read the questions below. Write the name of the triangle, then draw it in the space provided.

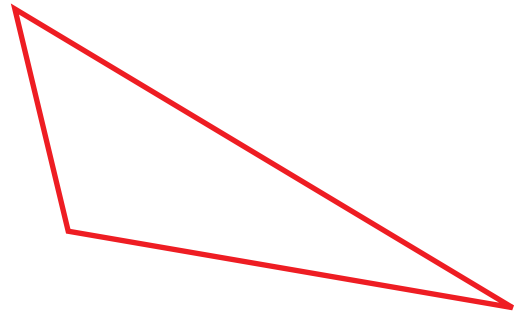
1. I have 2 equal sides.

What kind of triangle am I? Isosceles
Draw me!




2. I have 3 different sides and 3 different angles.

What kind of triangle am I? Scalene
Draw me!



3. I have 3 angles equal to 60° degrees.

What kind of triangle am I? Equilateral
Draw me!



4. I have 2 equal angles.

What kind of triangle am I? Isosceles
Draw me!

