


Name: \_\_\_\_\_

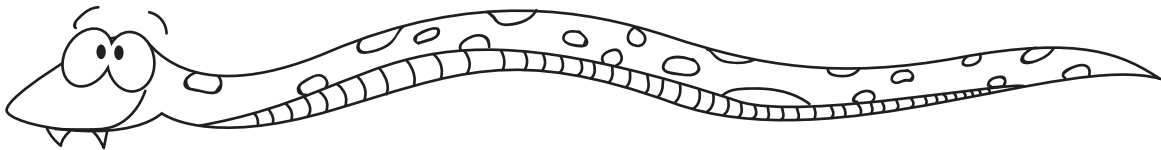
**Measuring**

**Snakes**



Estimate how many inches long you think each snake is from head to tail. Go back to the top of the page and use the ruler to see how close your guesses are! Record your measurement under each snake.

**ANSWER SHEET**



Estimated length: \_\_\_\_\_

Actual length: **6**



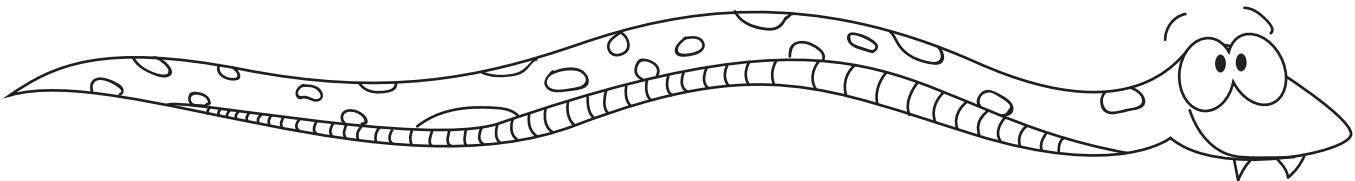
Estimated length: \_\_\_\_\_

Actual length: **2**



Estimated length: \_\_\_\_\_

Actual length: **3.5**



Estimated length: \_\_\_\_\_

Actual length: **7**