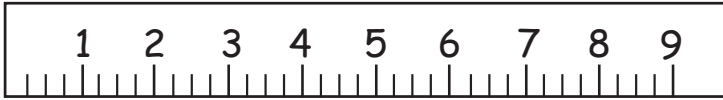



# Measurement Mania: TIME TO REVIEW

# ANSWERS

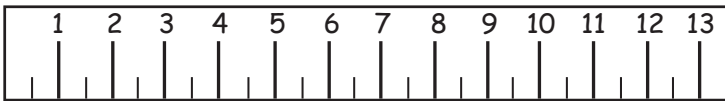
How many **inches** is the pencil? 7







How many **inches** is the match? 5




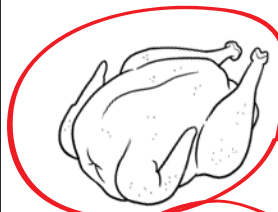
How many **centimeters** is the feather? 12



Circle all the objects that weigh less than 1 pound.




Circle all the objects that weigh more than 1 pound.




Circle the correct answers.

How much is 1 quart?



4 pints

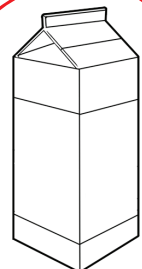


4 cups

How much is 1 liter?



about 1 gallon



about 1 quart