

3rd Grade

Distance

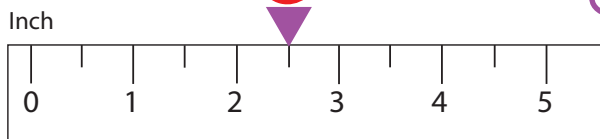
Practice Reading Measurement

Write the correct distance in the box.

How far did the ladybug travel?



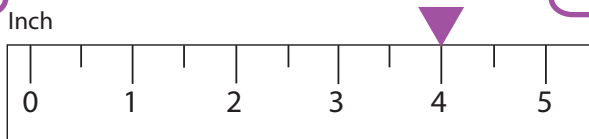
2½"



How far did the snail travel?



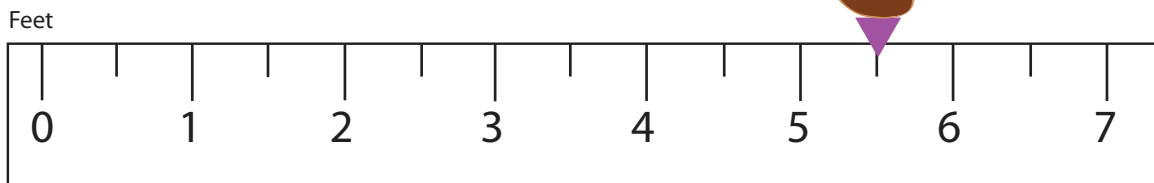
4"



How far did the duck swim?



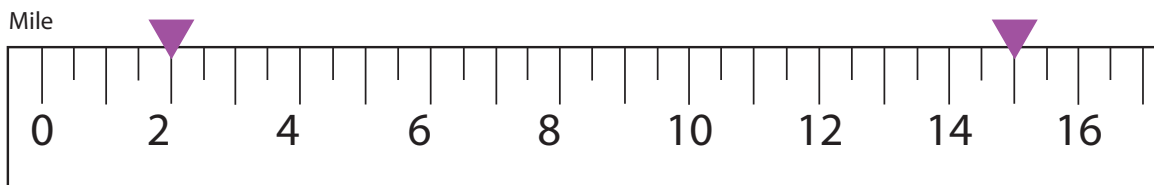
5'



How far is my house from yours?



13 miles



How far is the bakery from the bank?



23 miles

