

3rd  
Grade

# Match it!

## Identify the Metric System

Draw a line to match the US units with the closest metric unit. Then answer the questions below using the correct metric unit of measurement.

### The U.S. System

### The Metric System

inch

mile

Fahrenheit

feet

gallon

pound

ounce

acre

kilogram

liter

centimeter

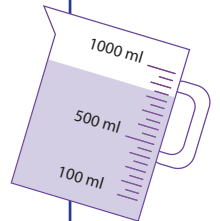
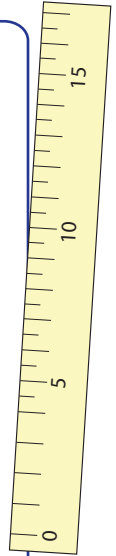
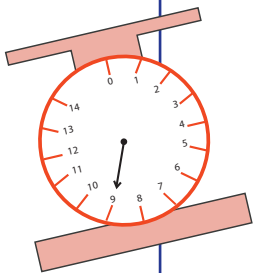
gram

kilometer

square meter

Celsius

meter



### Questions

1. Which units do we use to tell the temperature?

**Celsius**

2. Which units do we use to buy meat in the supermarket?

**Kilograms**

3. Which units do we use to measure the area of the land?

**Square Meters**

4. Which units do we use when we measure the volume of liquids?

**Liters**