

Name: _____

Date: _____

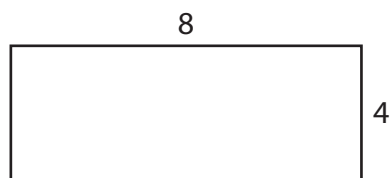
Measurement Learning Check



Part 1: Area

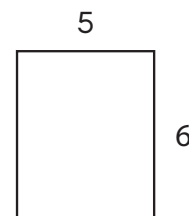
Directions: Find the area of the shapes below. Write your answer on the line.

1.



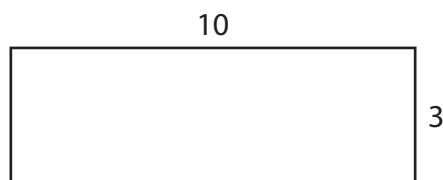
Area = 32 square units

2.



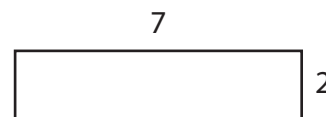
Area = 30 square units

3.



Area = 30 square units

4.

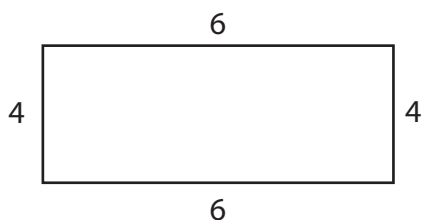


Area = 14 square units

Part 2: Perimeter

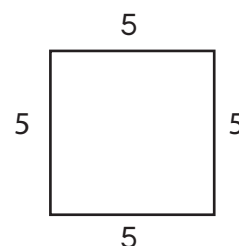
Directions: Find the perimeter of the shapes below. Write your answer on the line.

1.



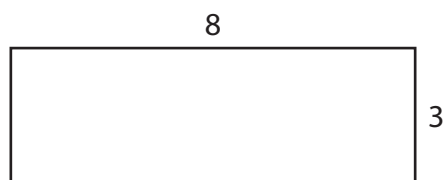
Perimeter = 20 units

2.



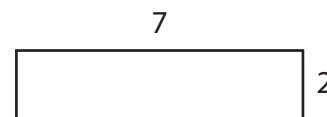
Perimeter = 20 units

3.



Perimeter = 22 units

4.



Perimeter = 18 units

Name: _____

Date: _____

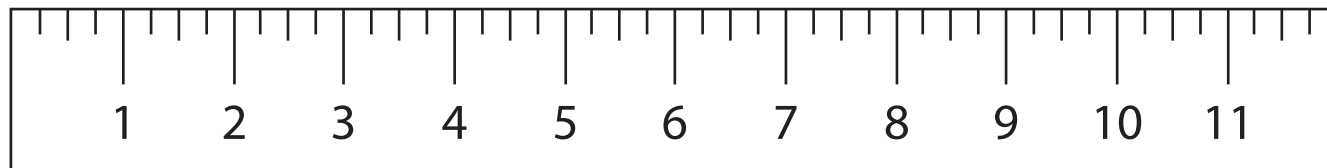
Measurement Learning Check



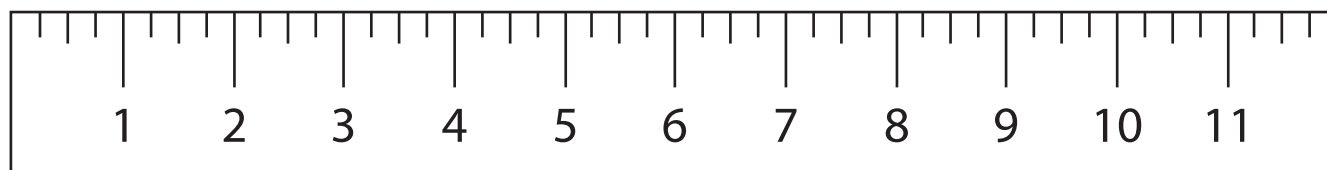
Part 3: Measurement

Directions: Measure the length of the lines below in inches. Record your answer in the space provided.

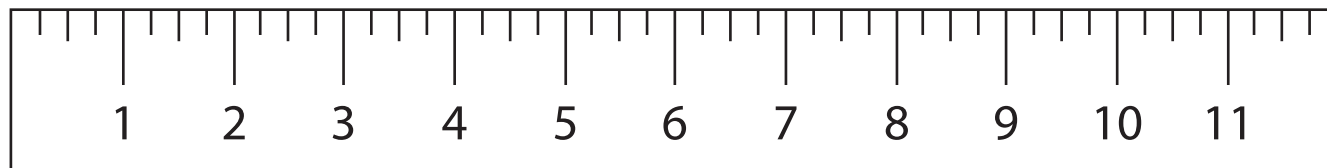
1. $5\frac{3}{4}$ inches



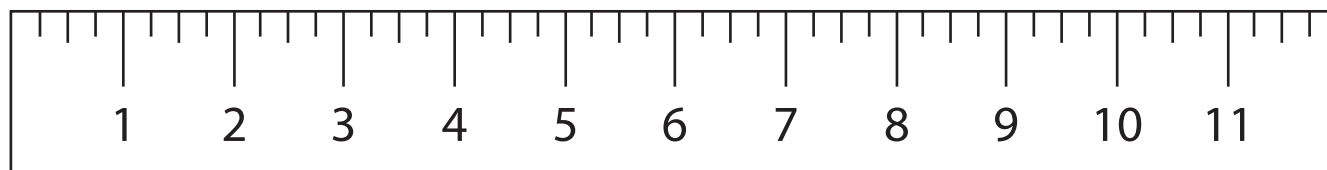
2. $3\frac{3}{4}$ inches



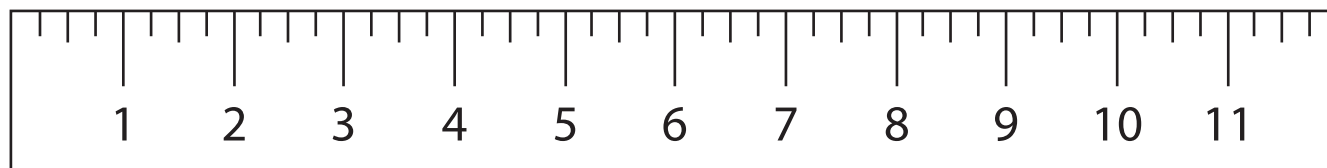
3. $4\frac{1}{2}$ inches



4. 10 inches



5. Draw a line with a length of $5\frac{1}{4}$ inches.



Name: _____

Date: _____

Measurement Learning Check



Part 4: Time

Directions: Solve the following word problems.

1. Recess began at 11:12am. It ended at 11:56am. How long was recess?

44 minutes

2. The assembly started at 2:02pm. It ended up at 2:45pm. How long was the assembly?

43 minutes

3. If the meeting started at 12:15pm and it took 55 minutes, what time did they finish?

1:10pm

4. If the cake went into the oven at 3:40pm and it needs to bake for 35 minutes, what time will the cake be fully baked?

4:15pm

5. The movie ended at 9:00pm. It was 95 minutes long. What time did we start the movie?

7:25pm

6. We arrived at the mall at 5:10pm. Since there was so much traffic, it took us 45 minutes to get there. What time did we start driving to the mall?

4:25pm