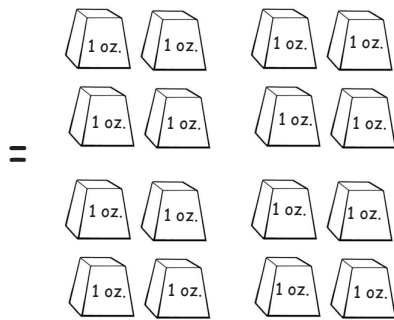
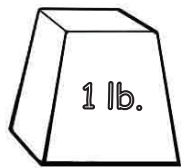


MEASURE AND COMPARE


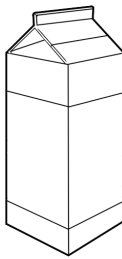
ANSWERS

Weight



1 pound = 16 ounces

Volume



1 quart = 4 cups



1 pint = 2 cups

8 ounces of grapes weigh

A. 1 pound

B. 1/2 pound

C. 2 pounds

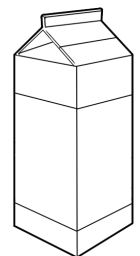


How many pints are in 1 quart of juice?

A. 2 pints


B. 3 pints

C. 4 pints



The kitten weighs 2 pounds. How many ounces does it weigh?

32 ounces




How many cups are in 2 quarts of milk?

A. 6 cups

B. 10 cups


C. 8 cups



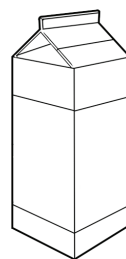
Which weighs more?

A. 12 ounces of oranges

B. 2 pounds of apples



True or False



=

