


Matching Numbers: One More

Name: _____


Date: _____


Directions: Look at each problem. Match the problem to the correct answer by drawing a line.



 $6 + 1$


 $3 + 1$


 $5 + 1$


 $7 + 1$


 $4 + 1$


 $9 + 1$

5

8

7

6

10

4