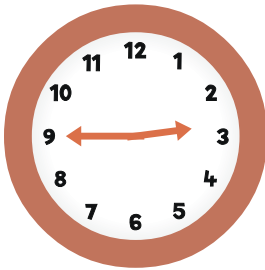


MATCH IT: QUARTER HOUR

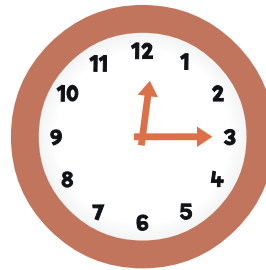
Circle the correct time shown on each clock.

1.

2:15

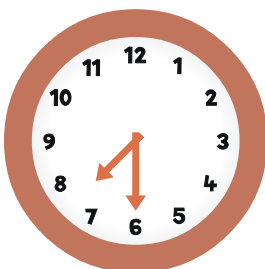
2:45

3:45

2.**12:15**

3:15

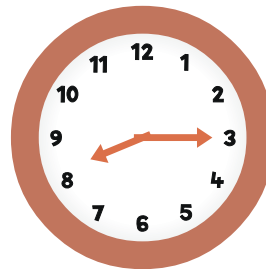
3:00

3.

6:30

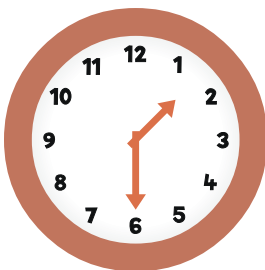
7:30

7:15

4.

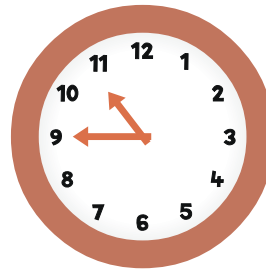
8:45

9:15

8:15**5.****1:30**

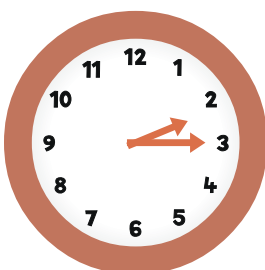
6:30

2:30

6.

9:00

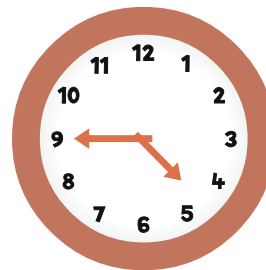
9:45

10:45**7.**

3:00

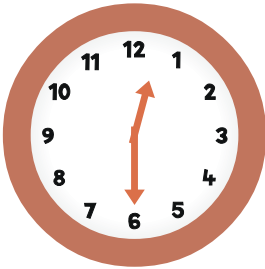
2:15

3:15

8.

9:15


9:45

4:45**9.**

12:00

12:30

6:30

10.

8:15

8:45

9:15