


Toy Store **ANSWERS**

Sally and her friends are at the toy store. Answer each problem about **making change** Show your work!



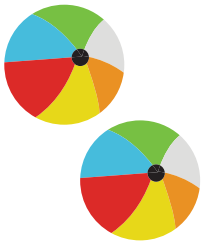
Sally has 65 cents. If she buys a teddy bear for 32 cents, how much change will she get back?

$$65 \text{ cents} - 32 \text{ cents} = 33 \text{ cents}$$




Alex has 82 cents. If he buys a ping-pong ball set for 64 cents, how much change will he get back?

$$82 \text{ cents} - 64 \text{ cents} = 18 \text{ cents}$$



Devon has 76 cents. Each beach ball costs 35 cents. If he buys two beach balls, how much change will he get back?

$$76 \text{ cents} - (35 \text{ cents} + 35 \text{ cents}) = 6 \text{ cents}$$



Maria has 98 cents. She wants to buy three rubber ducks. Each rubber duck costs 32 cents. Does she have enough money?

$$98 \text{ cents} - (32 \text{ cents} + 32 \text{ cents} + 32 \text{ cents}) = 2 \text{ cents};$$

yes, she has enough money