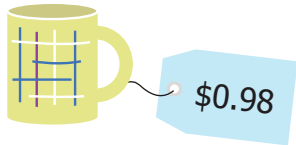


Art Museum Gift Shop

The third grade class at Parkside Elementary went on a trip to the art museum. Some of them bought items from the gift shop. Subtract to figure out how much change each person received.



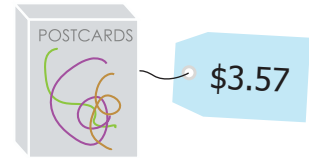
Elsa paid

$$\begin{array}{r} \$5.00 \\ - 0.98 \\ \hline 4.02 \end{array}$$



Ivan paid

$$\begin{array}{r} 0991 \\ \$10.00 \\ - 6.24 \\ \hline \$3.76 \end{array}$$



Ryan paid

$$\begin{array}{r} 51 \\ \$5.00 \\ - 3.57 \\ \hline \$2.03 \end{array}$$



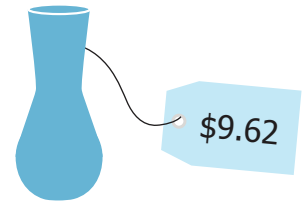
Eric paid

$$\begin{array}{r} 291 \\ \$3.00 \\ - 2.03 \\ \hline \$0.97 \end{array}$$



Elynn paid

$$\begin{array}{r} 01 \\ \$10.99 \\ - 5.99 \\ \hline \$5.00 \end{array}$$



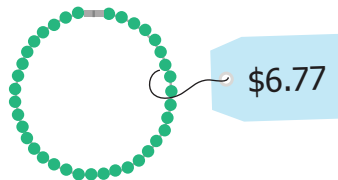
Gene paid

$$\begin{array}{r} 0991 \\ \$10.00 \\ - 9.62 \\ \hline \$0.38 \end{array}$$



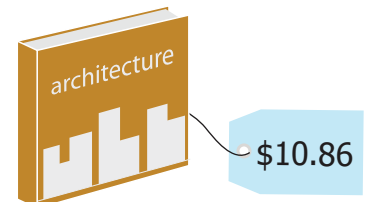
Ann paid

$$\begin{array}{r} 41 \\ \$12.00 \\ - 12.20 \\ \hline \$2.80 \end{array}$$



Joy paid

$$\begin{array}{r} 691 \\ \$7.00 \\ - 6.77 \\ \hline \$0.23 \end{array}$$



Joanne paid

$$\begin{array}{r} 091 \\ \$10.00 \\ - 10.86 \\ \hline \$0.14 \end{array}$$