


The Pet Store


Katie and her friends are at the pet store. Answer each of the problems below to see how much money they'll have left after the shopping day!




64¢



83¢



21¢



92¢

Katie has 96 cents. If she buys a kitten, how much change will she get back?

$$\begin{array}{r}
 \$ \underline{.96} \\
 - \$ \underline{.83} \\
 \hline
 \$ \underline{.13}
 \end{array}$$

Peter has 78 cents to buy a duck. How much will he get back?

$$\begin{array}{r}
 \$ \underline{.78} \\
 - \$ \underline{.64} \\
 \hline
 \$ \underline{.14}
 \end{array}$$

Jay wants to buy 2 goldfish. He has 42 cents. How much change will he get back?

$$\begin{array}{r}
 \$ \underline{.21} \\
 + \$ \underline{.21} \\
 \hline
 \$ \underline{.42}
 \end{array}
 \qquad
 \begin{array}{r}
 \$ \underline{.42} \\
 - \$ \underline{.42} \\
 \hline
 \$ \underline{.00}
 \end{array}$$

Rosie has \$1.45. She wants to buy a puppy and a goldfish. How much will she have left over?

$$\begin{array}{r}
 \$ \underline{.92} \\
 + \$ \underline{.21} \\
 \hline
 \$ \underline{1.13}
 \end{array}
 \qquad
 \begin{array}{r}
 \$ \underline{1.45} \\
 - \$ \underline{1.13} \\
 \hline
 \$ \underline{.32}
 \end{array}$$