



# Make 9 in Ten Frames

#3


Draw circles to make 9 in each ten frame. Then use the ten frame to complete the addition sentence.



$$\underline{1} + \underline{8} = 9$$



$$\underline{6} + \underline{3} = 9$$



$$\underline{2} + \underline{7} = 9$$