



Make 9 in Ten Frames

#2


Draw circles to make 9 in each ten frame. Then use the ten frame to complete the addition sentence.



$$\underline{7} + \underline{2} = 9$$



$$\underline{0} + \underline{9} = 9$$



$$\underline{4} + \underline{5} = 9$$