



# Make 9 in Ten Frames




Draw circles to make 9 in each ten frame. Then use the ten frame to complete the addition sentence.



$$\underline{3} + \underline{6} = 9$$



$$\underline{8} + \underline{1} = 9$$



$$\underline{5} + \underline{4} = 9$$