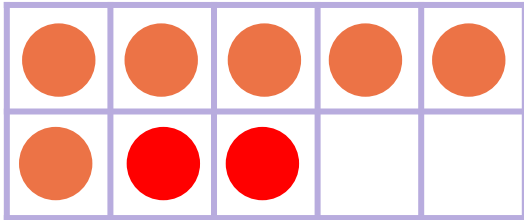



Make 8 in Ten Frames

#2

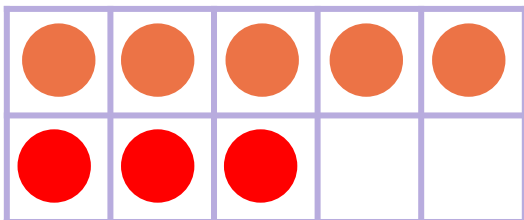
Draw circles to make 8 in each ten frame. Then use the ten frame to complete the addition sentence.



$$\underline{6} + \underline{2} = 8$$



$$\underline{0} + \underline{8} = 8$$



$$\underline{5} + \underline{3} = 8$$