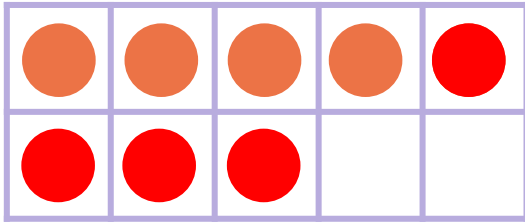



# Make 8 in Ten Frames



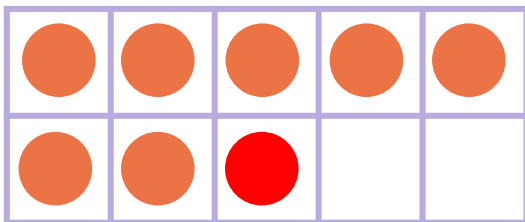
Draw circles to make 8 in each ten frame. Then use the ten frame to complete the addition sentence.



$$\underline{4} + \underline{4} = 8$$



$$\underline{2} + \underline{6} = 8$$



$$\underline{7} + \underline{1} = 8$$