



Make 7 in Ten Frames

#2


Draw circles to make 7 in each ten frame. Then use the ten frame to complete the addition sentence.



$$\underline{2} + \underline{5} = 7$$



$$\underline{0} + \underline{7} = 7$$



$$\underline{4} + \underline{3} = 7$$