



# Make 7 in Ten Frames




Draw circles to make 7 in each ten frame. Then use the ten frame to complete the addition sentence.



$$\underline{5} + \underline{2} = 7$$



$$\underline{1} + \underline{6} = 7$$



$$\underline{3} + \underline{4} = 7$$