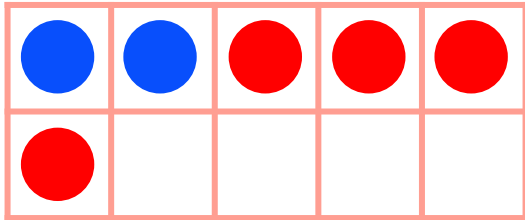


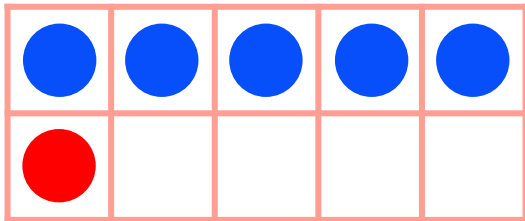
Make 6 in Ten Frames

#2

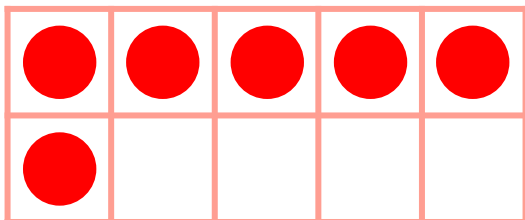
Draw circles to make 6 in each ten frame. Then use the ten frame to complete the addition sentence.



$$\underline{2} + \underline{4} = 6$$



$$\underline{5} + \underline{1} = 6$$



$$\underline{0} + \underline{6} = 6$$