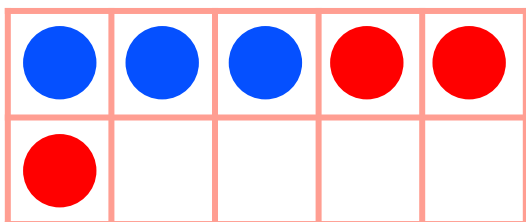



# Make 6 in Ten Frames



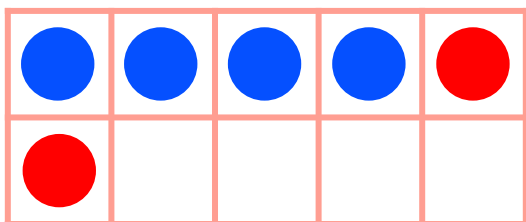
Draw circles to make 6 in each ten frame. Then use the ten frame to complete the addition sentence.



$$\underline{\quad 3 \quad} + \underline{\quad 3 \quad} = 6$$



$$\underline{\quad 1 \quad} + \underline{\quad 5 \quad} = 6$$



$$\underline{\quad 4 \quad} + \underline{\quad 2 \quad} = 6$$