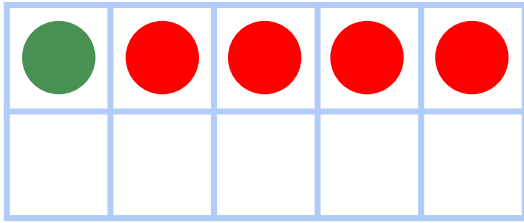


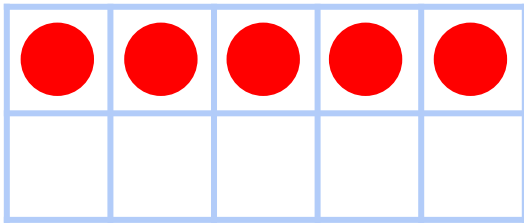
Make 5 in Ten Frames

#2

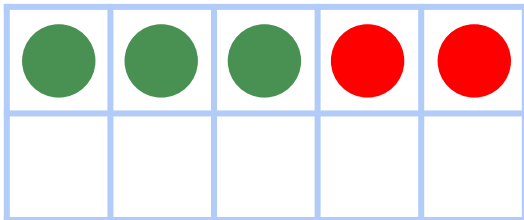
Draw circles to make 5 in each ten frame. Then use the ten frame to complete the addition sentence.



$$\underline{1} + \underline{4} = 5$$



$$\underline{0} + \underline{5} = 5$$



$$\underline{3} + \underline{2} = 5$$