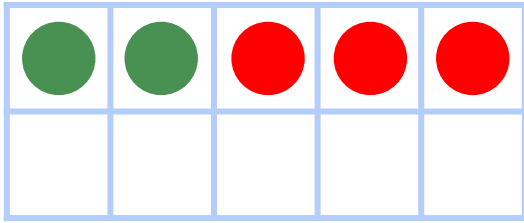


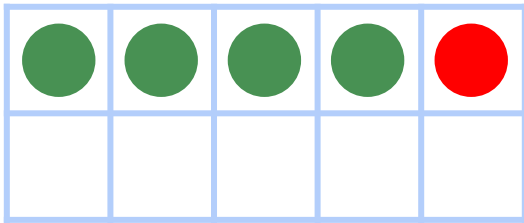
Make 5 in Ten Frames



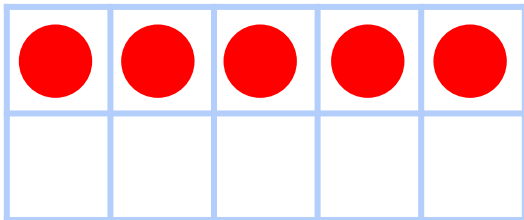
Draw circles to make 5 in each ten frame. Then use the ten frame to complete the addition sentence.



$$\underline{2} + \underline{3} = 5$$



$$\underline{4} + \underline{1} = 5$$



$$\underline{0} + \underline{5} = 5$$