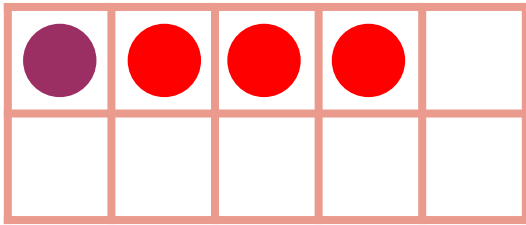



Make 4 in Ten Frames




Draw circles to make 4 in each ten frame. Then use the ten frame to complete the addition sentence.



$$\underline{1} + \underline{3} = 4$$



$$\underline{2} + \underline{2} = 4$$



$$\underline{0} + \underline{4} = 4$$