




Make 3 in Ten Frames


Draw circles to make 3 in each ten frame. Then use the ten frame to complete the addition sentence.



$$\underline{2} + \underline{1} = 3$$



$$\underline{0} + \underline{3} = 3$$



$$\underline{1} + \underline{2} = 3$$