

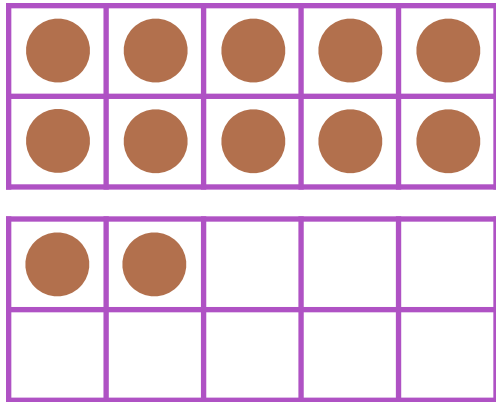
Make 11-19: Write the Equation #2

Write an equation to match each picture.

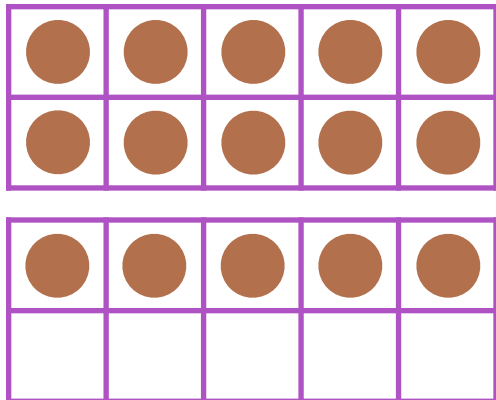
First, write the number of circles in the top ten frame.

Then, write the number of circles in the bottom ten frame.

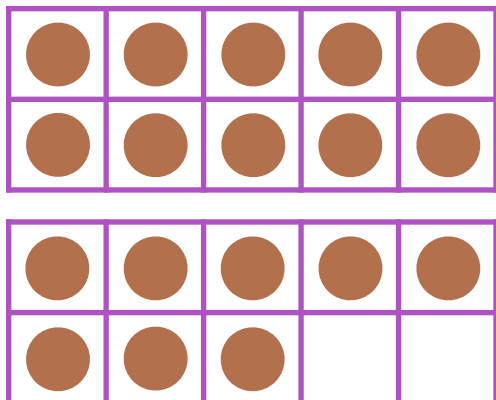
Last, write the number of circles in all.



$$\overline{10} + \overline{2} = \overline{12}$$



$$\overline{10} + \overline{5} = \overline{15}$$



$$\overline{10} + \overline{8} = \overline{18}$$