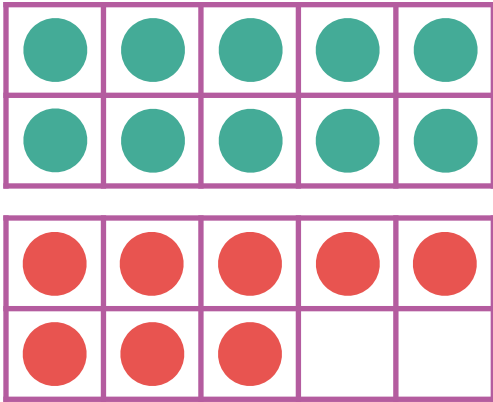


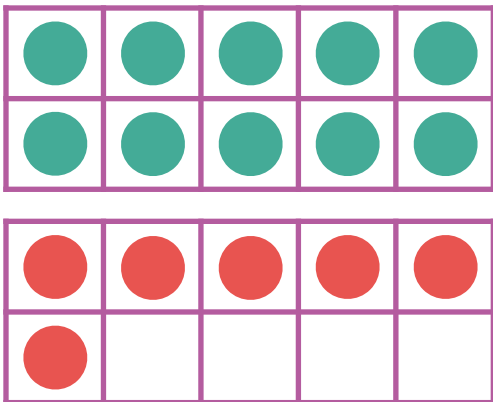
Make 11-19 in Ten Frames #6

Make **18**. Then write an addition sentence to match the ten frames.



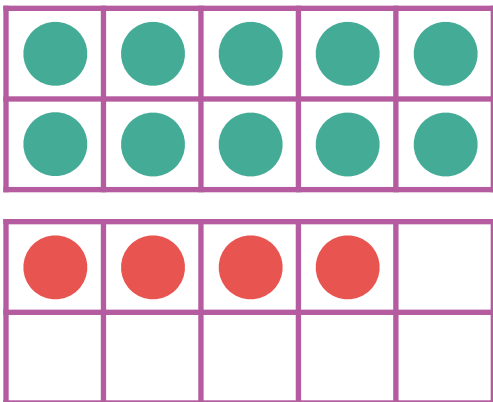
$$\overline{10} + \overline{8} = \overline{18}$$

Make **16**. Then write an addition sentence to match the ten frames.



$$\overline{10} + \overline{6} = \overline{16}$$

Make **14**. Then write an addition sentence to match the ten frames.



$$\overline{10} + \overline{4} = \overline{14}$$