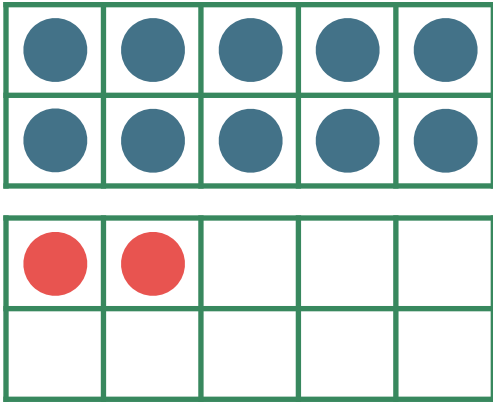


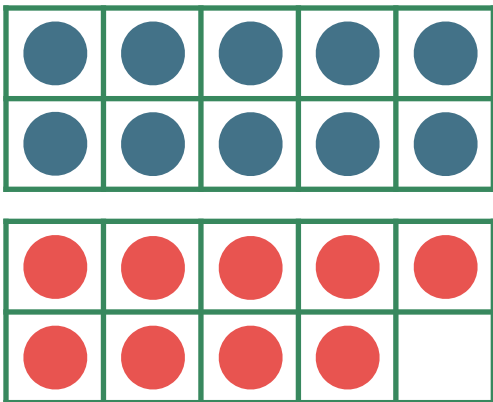
Make 11-19 in Ten Frames #5

Make **12**. Then write an addition sentence to match the ten frames.



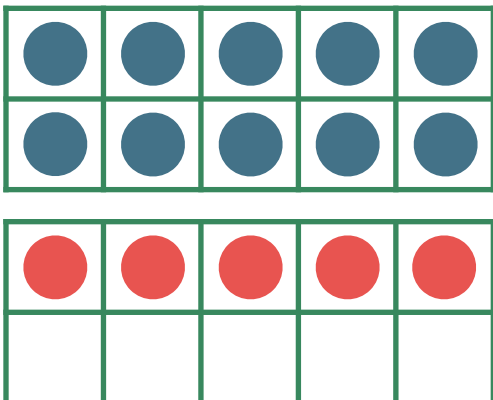
$$\overline{10} + \overline{2} = \overline{12}$$

Make **19**. Then write an addition sentence to match the ten frames.



$$\overline{10} + \overline{9} = \overline{19}$$

Make **15**. Then write an addition sentence to match the ten frames.



$$\overline{10} + \overline{5} = \overline{15}$$