
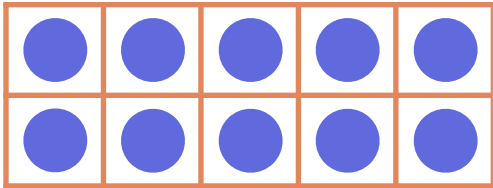


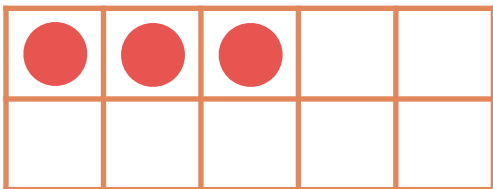
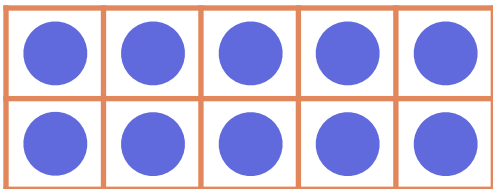
Make 11-19 in Ten Frames #4

Make **11**. Then write an addition sentence to match the ten frames.




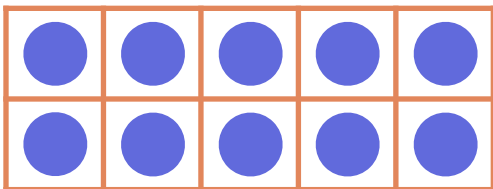
$$\overline{\text{10}} + \overline{\text{1}} = \overline{\text{11}}$$

Make **13**. Then write an addition sentence to match the ten frames.



$$\overline{\text{10}} + \overline{\text{3}} = \overline{\text{13}}$$

Make **17**. Then write an addition sentence to match the ten frames.



$$\overline{\text{10}} + \overline{\text{7}} = \overline{\text{17}}$$