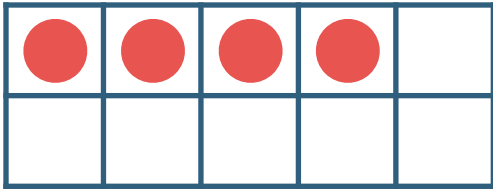



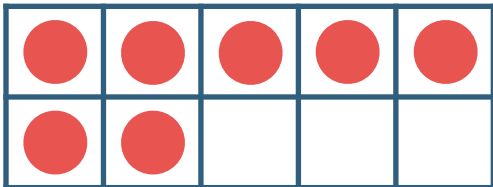
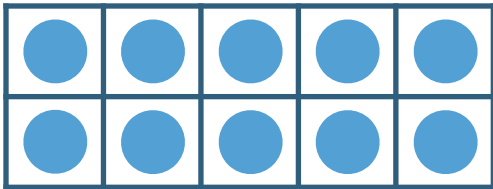
Make 11-19 in Ten Frames #3

Make **14**. Then write an addition sentence to match the ten frames.




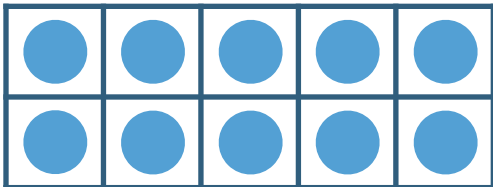
$$\overline{\text{10}} + \overline{\text{4}} = \overline{\text{14}}$$

Make **17**. Then write an addition sentence to match the ten frames.



$$\overline{\text{10}} + \overline{\text{7}} = \overline{\text{17}}$$

Make **19**. Then write an addition sentence to match the ten frames.



$$\overline{\text{10}} + \overline{\text{9}} = \overline{\text{19}}$$