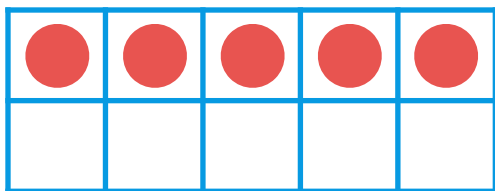





Make 11-19 in Ten Frames #2

Make **15**. Then write an addition sentence to match the ten frames.



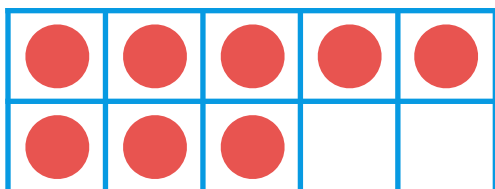

$$\overline{10} + \overline{5} = \overline{15}$$

Make **11**. Then write an addition sentence to match the ten frames.



$$\overline{10} + \overline{1} = \overline{11}$$

Make **18**. Then write an addition sentence to match the ten frames.



$$\overline{10} + \overline{8} = \overline{18}$$