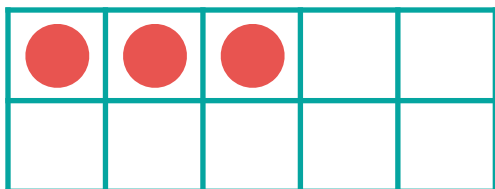





# Make 11-19 in Ten Frames #1

Make **13**. Then write an addition sentence to match the ten frames.



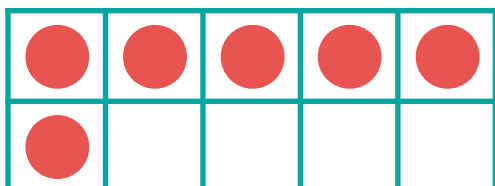

$$\overline{10} + \overline{3} = \overline{13}$$

Make **12**. Then write an addition sentence to match the ten frames.



$$\overline{10} + \overline{2} = \overline{12}$$

Make **16**. Then write an addition sentence to match the ten frames.



$$\overline{10} + \overline{6} = \overline{16}$$