


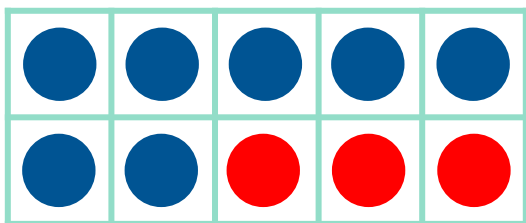
Make 10 in Ten Frames

#3

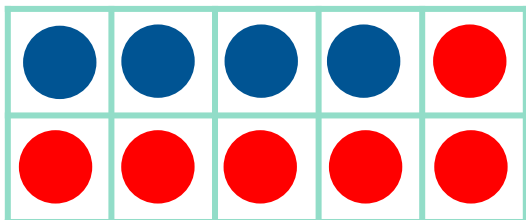
Draw circles to make 10 in each ten frame. Then use the ten frame to complete the addition sentence.



$$2 + 8 = 10$$



$$7 + 3 = 10$$



$$4 + 6 = 10$$