



Make 10 in Ten Frames

#2


Draw circles to make 10 in each ten frame. Then use the ten frame to complete the addition sentence.



$$\underline{8} + \underline{2} = 10$$



$$\underline{5} + \underline{5} = 10$$



$$\underline{9} + \underline{1} = 10$$