



Make 10 in Ten Frames




Draw circles to make 10 in each ten frame. Then use the ten frame to complete the addition sentence.



$$\underline{6} + \underline{4} = 10$$



$$\underline{3} + \underline{7} = 10$$



$$\underline{1} + \underline{9} = 10$$