


Answer Key


1st
Grade
Math
Geometry


Build a City


Practice
Marking
Location


Help Cindy the city planner do her job by drawing pictures on the map according to the key below.

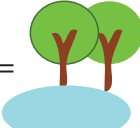
B4 =  Central park

D2 =  Train station

E3 =  Housing

B1 =  School

D1 =  Bank

E4 =  Pocket Park

