


# At The Beach


Read each problem. Use the picture graph to help you answer the questions.

Sally saw 4 crabs, 3 starfish and 2 seashells. How many did she see all together?




9 critters

Johnny found 5 seashells, 2 fishes and 4 clams. How many did he find all together?



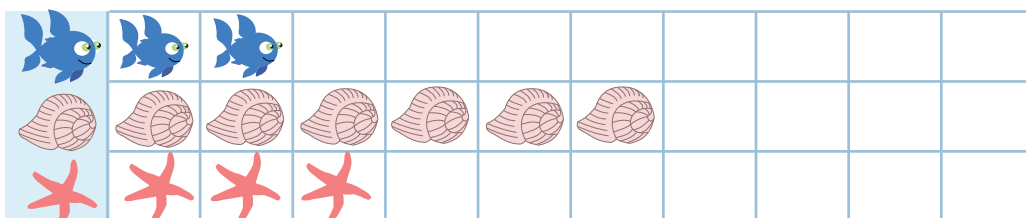
11 critters

Lupe saw 6 whales 3 crabs and 1 octopus. How many sea creatures are there all together?



10 creatures

There are 2 fish, 6 seashells and 3 starfish. How many critters are there in all?



11 critters