
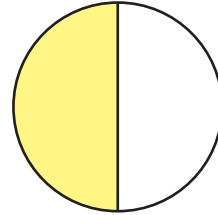


ANSWERS**Identifying Halves**


Write the correct fraction term that represents the shaded part of each shape:
zero halves, one half, or two halves.



two halves



one half



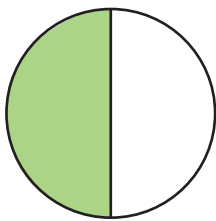
two halves




zero halves

Write the correct fraction that represents the shaded part of each shape:


$\frac{0}{2}$, $\frac{1}{2}$, or $\frac{2}{2}$



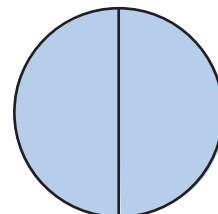
$\frac{1}{2}$



$\frac{1}{2}$



$\frac{0}{2}$



$\frac{2}{2}$