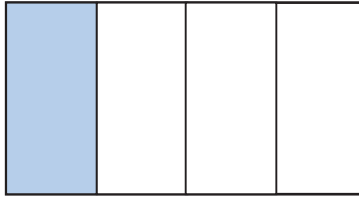
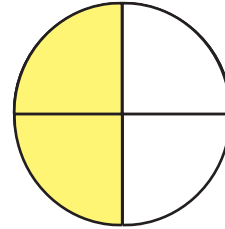


ANSWERS**Identifying Fourths**

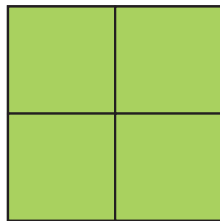
Write the correct fraction term that represents the shaded part of each shape: zero fourths, one fourth, two fourths, three fourths, or four fourths.



one fourth



two fourths



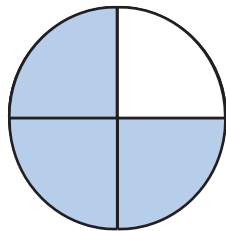
four fourths




zero fourths

Write the correct fraction that represents the shaded part of each shape:

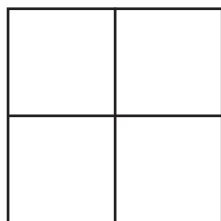
$\frac{0}{4}$, $\frac{1}{4}$, $\frac{2}{4}$ or $\frac{3}{4}$



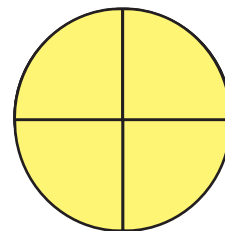
$\frac{3}{4}$



$\frac{2}{4}$



$\frac{0}{4}$



$\frac{4}{4}$