

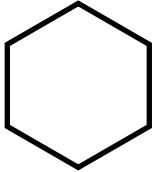
Name: _____

Date: _____


ANSWERS

Identify Trapezoids


Using the word bank, write the name of each shape below.
Trapezoids are quadrilaterals with only one pair of parallel sides.
Color all the trapezoids purple.




Hexagon



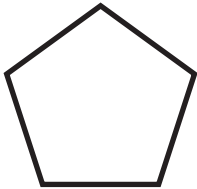
Trapezoid




Circle



Trapezoid



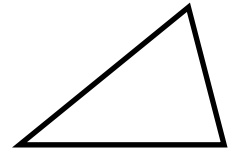
Pentagon




Trapezoid



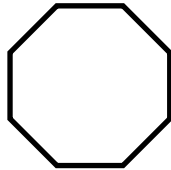
Rectangle




Triangle



Trapezoid



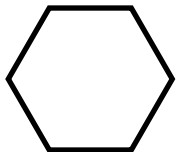
Octagon



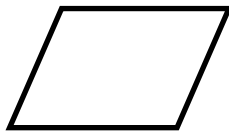
Square



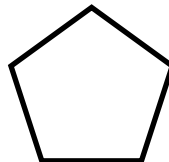
Rectangle




Hexagon



Rhombus



Pentagon



Trapezoid

Word Bank

circle hexagon pentagon octagon triangle
rectangle rhombus square trapezoid

