


Name: _____

Date: **Answer Key**

Identify 2-D and 3-D Shapes

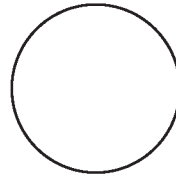
Using the word bank, write the name of each shape below.



cube



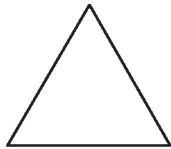
rectangle



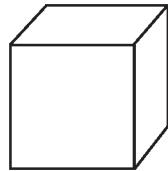
circle



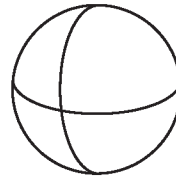
rectangular prism



triangle



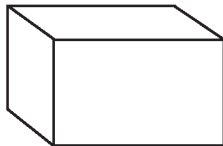
cube



sphere



cone



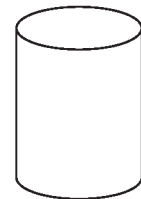
rectangular prism



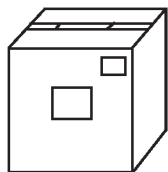
cone



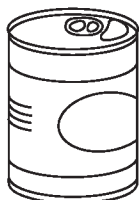
square



cylinder



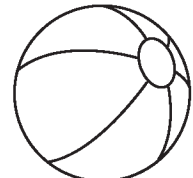
cube



cylinder



cone



sphere

Word Bank

circle
cone
cylinder

cube
rectangle
rectangular prism

sphere
square
triangle