


Name _____

Date _____

Answer Key



PART 1. Look at the numbers below written as hundreds or tens. Write the numeral.

EXAMPLE: 20 tens = 200

1. 3 hundreds = 300

6. 1 ten = 10

2. 2 tens = 20

7. 10 tens = 100

3. 4 tens = 40

8. 70 tens = 700


4. 7 tens = 70


9. 6 tens = 60


5. 8 hundreds = 800


10. 40 tens = 400

PART 2. Look at the base ten diagrams below. Write the numeral.

EXAMPLE:  = 200



 = 600

 = 300