




COUNTING COINS #2

How Much Change?

Take an imaginary shopping trip! Look at the coins to determine the amount of money you have, then decide what you will buy with the amount written in the middle column. After spending this amount, calculate how much money you have left.

You Have	You Spend	What's Left
	<p style="text-align: center;">29¢ on</p> <hr/> <p style="text-align: center;">Answers will vary. (Write your item here.)</p>	<p style="text-align: center;">17¢</p>
	<p style="text-align: center;">14¢ on</p> <hr/> <p style="text-align: center;">Answers will vary. (Write your item here.)</p>	<p style="text-align: center;">28¢</p>
	<p style="text-align: center;">33¢ on</p> <hr/> <p style="text-align: center;">Answers will vary. (Write your item here.)</p>	<p style="text-align: center;">23¢</p>