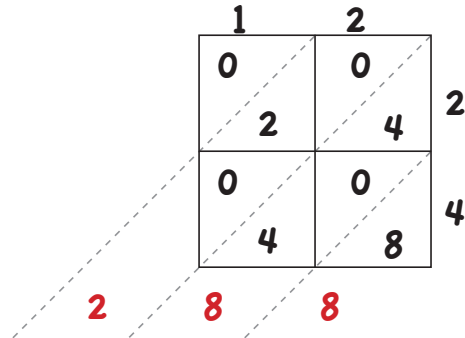


LATTICE MULTIPLICATION

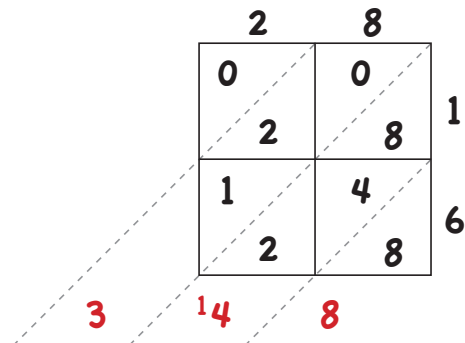


12 Children went trick-or-treating. Each child got 24 pieces of candy. How many pieces of candy did they have in all?



Answer 288

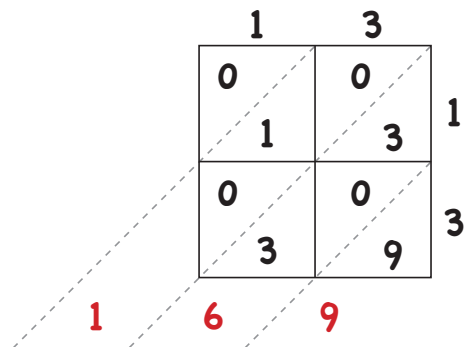
There are 28 children in Miss Becky's classroom. Miss Becky gave each child 1 cupcake, 5 candy corns and 10 chocolate candies. How many sweet treats did Miss Becky give out all together?



Answer 448



13 black cats each had 13 kittens! How many kittens were there?



Answer 169