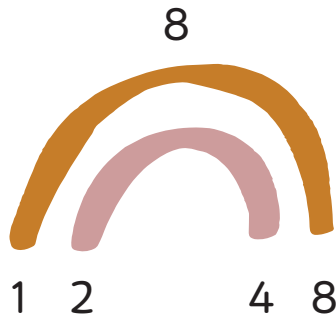


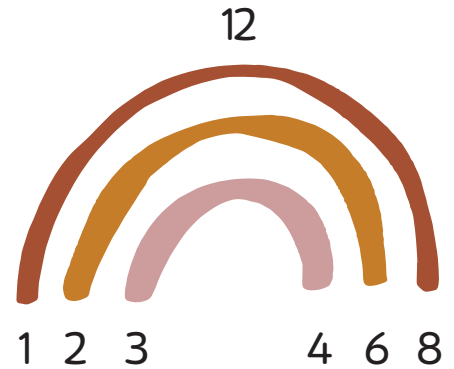
≡ GREATEST COMMON FACTOR ≡

Draw factor rainbows to find the greatest common factor for each pair of numbers.
Write the common factors in the cloud. Circle the greatest common factor.

✨ Example: 8, 12

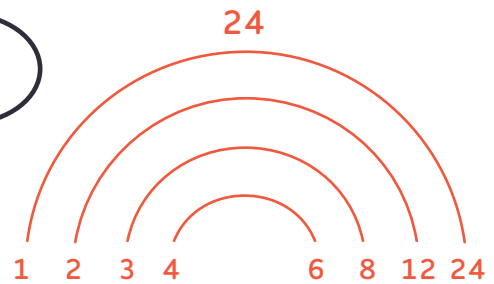
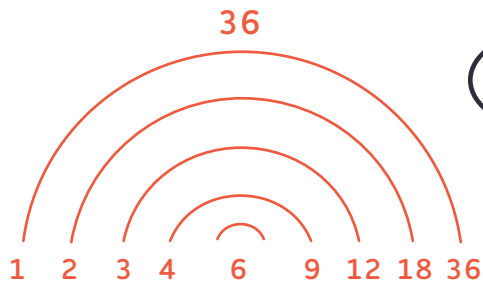


Common Factors:



a. 36, 24

Common Factors:



b. 40, 32

Common Factors:

